

**O.P. JINDAL SCHOOL, SAVITRI NAGAR**

**Half Yearly Examination - (2025-2026)**

**Class / Section: III ( )**

**MM: 80**

**Subject: Environmental Science**

**Time: 2 Hrs15min**

Name: \_\_\_\_\_

Roll No.: \_\_\_\_\_

Invigilator's Sign \_\_\_\_\_

Marks Obtained: \_\_\_\_\_

Examiner's Sign: \_\_\_\_\_

---

*(Fifteen Minutes Extra will be given for reading the Questions)*

**General Instructions:**

\*The question paper comprises of five sections A, B, C, D, E. There are 24 questions in the - question paper. All questions are compulsory.

\*Section A, question no. 1 is of MCQ type carrying 1 mark each.

\*Section B, question no. 2 and 3 are of case-based and carrying 4 marks each.

\*Section C, question no. 4 to 12 is very short answer type and carrying 2 marks each.

\*Section D question no. 13 to 21 are short answer type and carrying 3 marks each.

\*Section E question no. 22 to 24 are long answer type and carrying 5 marks each.

---

**Section-A**

**Q1. Tick the correct option-**

(i) Which flower is used to make 'Vishu Kani'?

a) Marigold

b) Amaltas

c) Buransh

d) Rose

(ii) Rishi is travelling to which place with his parents?

a) Kerala

b) Bihar

c) Himalayas

d) Aravali

(iii) Which is the top most layer of the earth?

a) Trees

b) Soil

c) Herbs

d) Creepers

(iv) Haakh is a kind of dish in

a) Punjab

b) Odisha

c) Kashmir

d) Kerala

(v) Shambu and his father sat under the shade of the

a) Banyan tree

b) Apple tree

c) Mango tree

d) Neem tree

(vi) Animals waste improves the \_\_\_\_\_ of soil.

a) Fertility

b) Sweetness

c) Roughness

d) Colour

(vii) Hairpin turns present on the

- a) sand                                      b) Cricket                                      c) Road                                      d) class

(viii) Nita's father joined the

- a) Cooking                                      b) Cleaning                                      c) Conversation                                      d) Gardening

(ix) The mela is little far from the

- a) Market                                      b) Neighbourhood                                      c) Shop                                      d) Home

(x) Mohan chacha and his family are arriving by

- a) Bus                                      b) Car                                      c) Scooter                                      d) Auto

(xi) The children enjoyed snacks like gol gappa and hot

- a) Samosa                                      b) Jalebis                                      c) Soup                                      d) Coffee

(xii) Who gives us oxygen to breathe?

- a) Plant                                      b) Pond                                      c) Mountain                                      d) Sister

### Section-B

**Q2. Read the paragraph and ( ✓ ) the correct answers. (Case based)-**

Everyone loves each other and takes care of each other. Families also love and care for animals, trees and plants. Animals like cows, buffaloes, dogs, parrots, cats and goats can also be part of a family. We should be loving and caring towards animals the way Bela and Banku are towards their pet, Sheru.

(i) How many animals are there?

- a) Five                                      b) Four                                      c) Six                                      d) Seven

(ii) Who is Sheru?

- a) Pet dog                                      b) Pet cat                                      c) Pet rabbit                                      d) Pet parrot

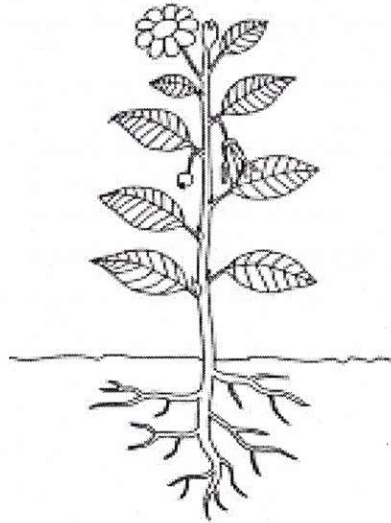
(iii) We should love and care for

- a) Insects                                      b) Trees                                      c) Animals                                      d) Fish

(iv) Bela and Banku are

- a) Friends                                      b) Siblings                                      c) Cousins                                      d) Relatives

**Q3. Look at the picture and ( ✓ ) the correct answers. (Case based)-**



(i) This picture shows the parts of the

- a) Plant                      b) Earth                      c) Soil                      d) Cloud

(ii) We get seeds from the

- a) Flowers                      b) Roots                      c) Leaves                      d) Fruits

(iii) Which part of the plant is called the kitchen of a plant?

- a) Roots                      b) Leaves                      c) Stems                      d) Branches

(iv) Flowers helps in the

- a) Circula                      b) Respiration                      c) Pollination                      d) Evaporation

### **Section-C**

**Q4.**Why do you think we should not tease or hurt animals?

Ans- \_\_\_\_\_  
\_\_\_\_\_  
\_\_\_\_\_  
\_\_\_\_\_

**Q5.** How do you prepare yourself for a long trip? Write any two points.

Ans- \_\_\_\_\_  
\_\_\_\_\_  
\_\_\_\_\_  
\_\_\_\_\_

Q6. What are the different modes of transport? Write with one example of each.

Ans- \_\_\_\_\_  
\_\_\_\_\_  
\_\_\_\_\_  
\_\_\_\_\_

Q7. Draw the diagram of two herbs and write their names

--	--

Q8. Mention the plants given below whether it is climber or creeper:

Ans    i) Bottle gourd    \_\_\_\_\_  
         ii) Money plant    \_\_\_\_\_  
         iii) Jasmine    \_\_\_\_\_  
         iv) Pumpkin    \_\_\_\_\_

Q9. Why do the animals choose to live near the plants?

Ans \_\_\_\_\_  
\_\_\_\_\_  
\_\_\_\_\_  
\_\_\_\_\_  
\_\_\_\_\_

Q10. How do animals help plants to grow?

Ans - \_\_\_\_\_  
\_\_\_\_\_  
\_\_\_\_\_  
\_\_\_\_\_



Q11. What is soil made up of?

Ans- \_\_\_\_\_  
\_\_\_\_\_  
\_\_\_\_\_

Q12. Write the name of the place where these animals are present:

Monkey - \_\_\_\_\_

Ant - \_\_\_\_\_

Butterfly - \_\_\_\_\_

Fish - \_\_\_\_\_

**(Section -D)**

Q13. What do you learn from elders in your family?

Ans \_\_\_\_\_  
\_\_\_\_\_  
\_\_\_\_\_  
\_\_\_\_\_


Q14. What is the relationship of these family members with you?

Cousins \_\_\_\_\_

Mama \_\_\_\_\_

Grandma \_\_\_\_\_

Q15. Identify these pictures and write their names:



Q16. Write the three functions of the stem?

Ans \_\_\_\_\_  
\_\_\_\_\_  
\_\_\_\_\_  
\_\_\_\_\_

Q17. Why should we not cut too many trees? Write any three reasons.

Ans \_\_\_\_\_  
\_\_\_\_\_  
\_\_\_\_\_

Q18. Give two examples of each animals, birds and insects.

Ans- \_\_\_\_\_  
\_\_\_\_\_  
\_\_\_\_\_

Q19. Why we do not hear any sound of birds?

Ans- \_\_\_\_\_  
\_\_\_\_\_  
\_\_\_\_\_

Q20. Why it is important to maintain a harmonious balance between plants, animals and humans?

Ans \_\_\_\_\_  
\_\_\_\_\_  
\_\_\_\_\_  
\_\_\_\_\_  
\_\_\_\_\_

Q21. Draw the diagram of these animals and write their names.

i) Four legs

ii) Six legs

iii) Two legs

Ans.

--	--	--

**(Section-E)**

Q22. Write one word for:

i) Camels eat leaves from it. \_\_\_\_\_

ii) Owls use it for their young ones in the plant. \_\_\_\_\_

iii) Sunbirds and butterflies drink it from flowers. \_\_\_\_\_

iv) Which bird stitches leaves of plant for making nest. \_\_\_\_\_

V) This insect munch on different leaves of plants for food. \_\_\_\_\_

-

Q23. Draw the diagram of five things with names which we get from the plants.

--	--	--	--	--

Q24.a) Draw and fill the accurate colours in the signboards given below:

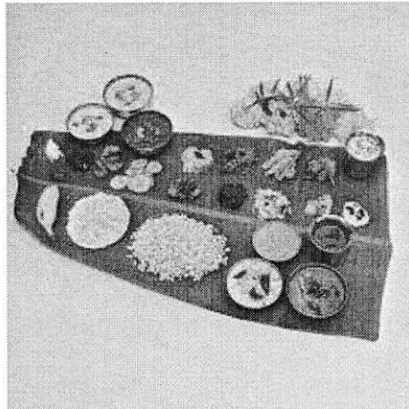
School Ahead

Speed breaker

No Horn Please

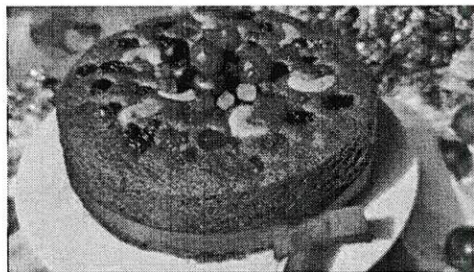
--	--	--

b) Identify these food items:



\_\_\_\_\_  
(name of the food)

\_\_\_\_\_  
(name of the festival)



\_\_\_\_\_  
(name of the food)

\_\_\_\_\_  
(name of the festival)